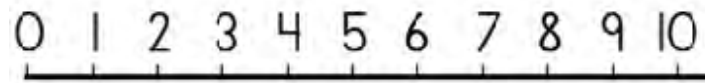


(0-10) ADDING & TAKE AWAY QUESTIONS



a) $3 + 1 = \square$

b) $4 - 2 = \square$

c) $5 - 1 = \square$

d) $2 + 6 = \square$

e) $4 + 4 = \square$

f) $7 - 3 = \square$

g) $7 + 2 = \square$

h) $9 - 5 = \square$

(0-10) ADDING & TAKE AWAY QUESTIONS

Answers

a) $3 + 1 = \boxed{4}$

b) $4 - 2 = \boxed{2}$

c) $5 - 1 = \boxed{4}$

d) $2 + 6 = \boxed{8}$

e) $4 + 4 = \boxed{8}$

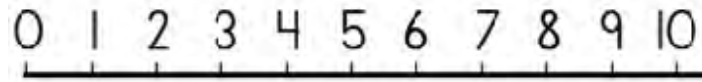
f) $7 - 3 = \boxed{4}$

g) $7 + 2 = \boxed{9}$

h) $9 - 5 = \boxed{4}$

(0-10) ADDING & TAKE AWAY QUESTIONS

Find the missing numbers



a) + 1 = 4

b) - 2 = 2

c) - 1 = 4

d) + 6 = 8

e) + 4 = 8

f) - 3 = 4

g) + 2 = 9

h) - 5 = 4

(0-10) ADDING & TAKE AWAY QUESTIONS

Find the missing numbers

Answers

a) $\boxed{3} + 1 = 4$

b) $\boxed{4} - 2 = 2$

c) $\boxed{5} - 1 = 4$

d) $\boxed{2} + 6 = 8$

e) $\boxed{4} + 4 = 8$

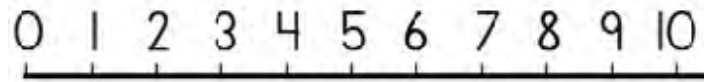
f) $\boxed{7} - 3 = 4$

g) $\boxed{7} + 2 = 9$

h) $\boxed{9} - 5 = 4$

(0-10) ADDING & TAKE AWAY QUESTIONS

Find the missing numbers



a) $3 + \square = 4$

b) $4 - \square = 2$

c) $5 - \square = 4$

d) $2 + \square = 8$

e) $4 + \square = 8$

f) $7 - \square = 4$

g) $7 + \square = 9$

h) $9 - \square = 4$

(0-10) ADDING & TAKE AWAY QUESTIONS

Find the missing numbers

Answers

$$\text{a) } 3 + \boxed{1} = 4$$

$$\text{b) } 4 - \boxed{2} = 2$$

$$\text{c) } 5 - \boxed{1} = 4$$

$$\text{d) } 2 + \boxed{6} = 8$$

$$\text{e) } 4 + \boxed{4} = 8$$

$$\text{f) } 7 - \boxed{3} = 4$$

$$\text{g) } 7 + \boxed{2} = 9$$

$$\text{h) } 9 - \boxed{5} = 4$$