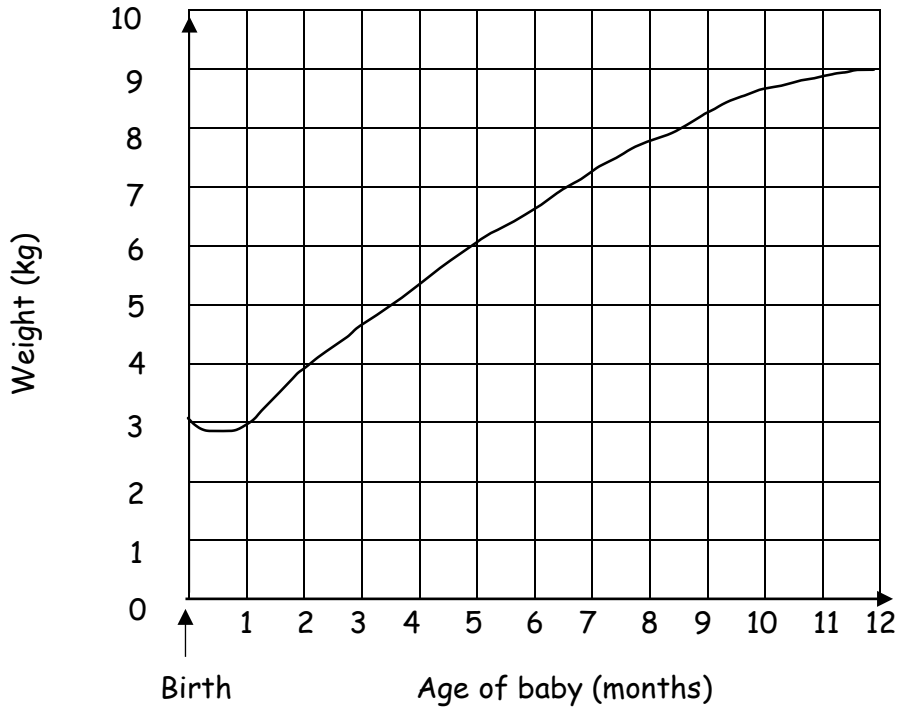


# LINE GRAPH 1



This line graph shows how the weight of a baby changed over 12 months

## Answer the questions

1) What was the weight of the baby when it was born?

2) What was the weight at 12 months?

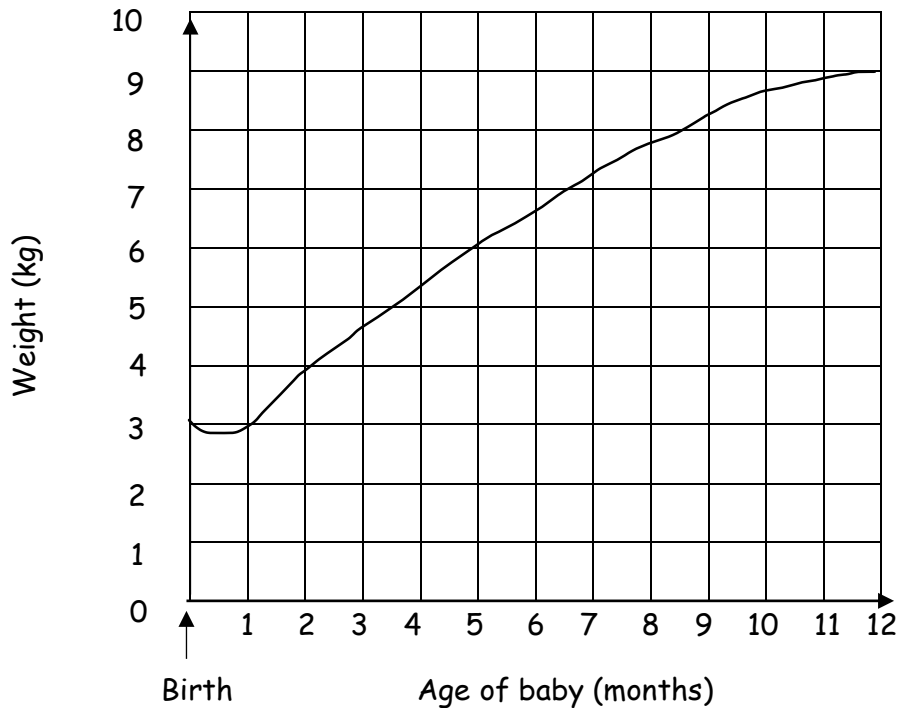
3) What was the weight at 5 months?

4) How much weight did the baby put on between 2 and 5 months?

5) At which two ages was the baby's weight the same?

6) When did the baby's weight go down?

## LINE GRAPH 1



This line graph shows how the weight of a baby changed over 12 months

### Answers

1) What was the weight of the baby when it was born?

3kg

2) What was the weight at 12 months?

9kg

3) What was the weight at 5 months?

6kg

4) How much weight did the baby put on between 2 and 5 months?

2kg


5) At which two ages was the baby's weight the same?

birth & 1 month

6) When did the baby's weight go down?

between birth & 1 month

## LINE GRAPH 2



The weight of a baby was taken every 2 months for a year

| birth | 2 months | 4 months | 6 months | 8 months | 10 months | 12 months |
|-------|----------|----------|----------|----------|-----------|-----------|
| 4kg   | 5kg      | 7kg      | 8kg      | 8kg      | 9kg       | 10kg      |

**Draw a line graph and label the axes**

**Write 3 questions about the graph**

.....

.....

.....

.....

.....

.....

.....

.....

## LINE GRAPH 2

Answer

