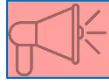
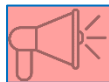


NUMERALS 0-10 (in order)

Draw the right number of circles or get the right number of blocks



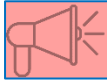
0




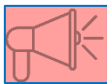
1

NUMERALS 0-10 (in order)

Answers



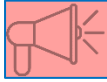
0



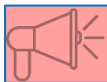
1

NUMERALS 0-10 (in order)

Draw the right number of circles or get the right number of blocks



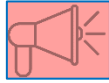
2



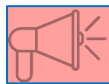
3

NUMERALS 0-10 (in order)

Answers



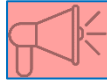
A large rectangular box containing a central black numeral '2'. To the left of the numeral is a large empty circle, and to the right is another large empty circle, intended for a student to draw the numeral '2'.



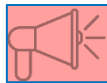
A large rectangular box containing a central black numeral '3'. To the left of the numeral is a large empty circle, to the right is another large empty circle, and below the numeral is a third large empty circle, intended for a student to draw the numeral '3'.

NUMERALS 0-10 (in order)

Draw the right number of circles or get the right number of blocks



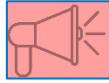
4



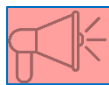
5

NUMERALS 0-10 (in order)

Answers



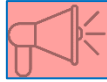
A rectangular box containing a large black numeral '4' in the center. Surrounding the numeral are four empty circles: one to the left, one to the right, one below, and one to the bottom-right.



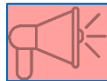
A rectangular box containing a large black numeral '5' in the center. Surrounding the numeral are five empty circles: one to the left, one to the right, one below, and two to the bottom-right.

NUMERALS 0-10 (in order)

Draw the right number of circles or get the right number of blocks



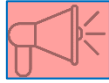
6



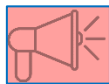
7

NUMERALS 0-10 (in order)

Answers



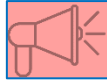
A rectangular box containing the numeral **6** in the center. Surrounding the numeral are six empty circles arranged in two rows: two in the top row and four in the bottom row.



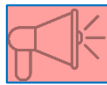
A rectangular box containing the numeral **7** in the center. Surrounding the numeral are seven empty circles arranged in two rows: three in the top row and four in the bottom row.

NUMERALS 0-10 (in order)

Draw the right number of circles or get the right number of blocks



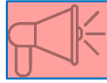
8











9










NUMERALS 0-10 (in order)

Answers



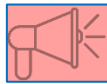
		8		
				



		9		
				

NUMERALS 0-10 (in order)

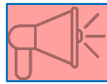
Draw the right number of circles or get the right number of blocks



10

NUMERALS 0-10 (in order)

Answer



A large rectangular box containing a dot-marker activity. In the center, the numeral '10' is written in a large, bold, black font. Surrounding the numeral are ten empty circles, arranged in three rows: the top row has two circles, the middle row has four circles, and the bottom row has four circles. These circles are intended for students to place dots to trace the shape of the number 10.