

(O'CLOCK)

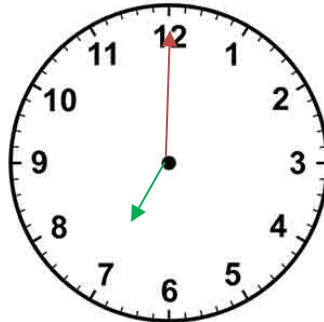
<https://www.youtube.com/watch?v=3Posbu-VKxU>

(watch up to 1min 25s)



The long (minute) hand is on the 12

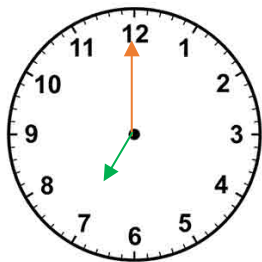
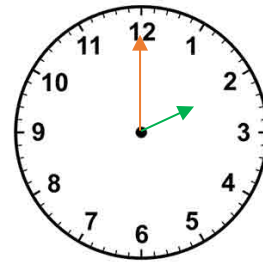
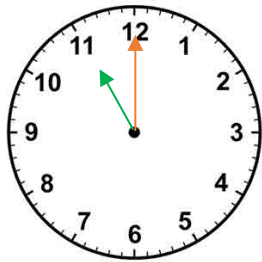
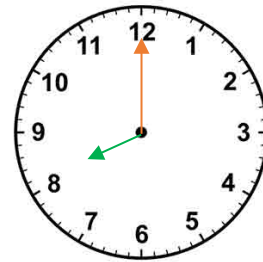
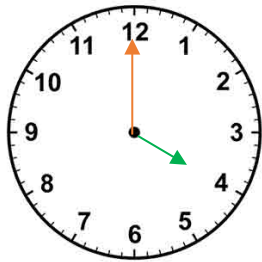
This shows it is O'clock



The short (hour) hand is on the 7

This shows it is 7 O'clock

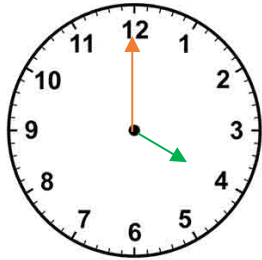
What time is it?



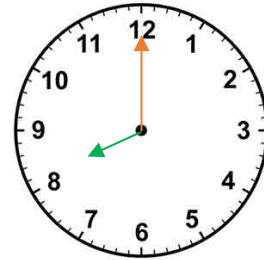
(O'CLOCK)

What time is it?

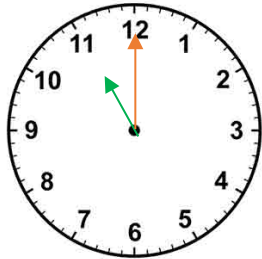
Answers



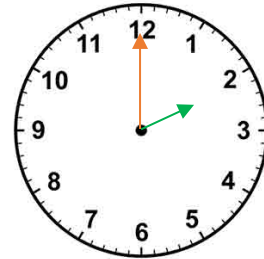
4 o'clock



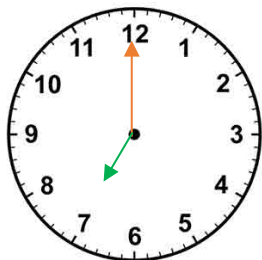
8 o'clock



11 o'clock



2 o'clock



7 o'clock

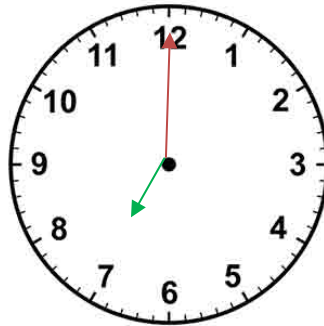


10 o'clock

(O'CLOCK)

The long (minute) hand is on the 12

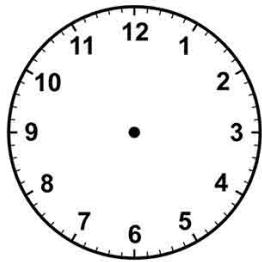
This shows it is O'clock



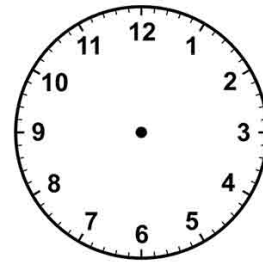
The short (hour) hand is on the 7

This shows it is 7 O'clock


Put in the hour and minute hands to show the time



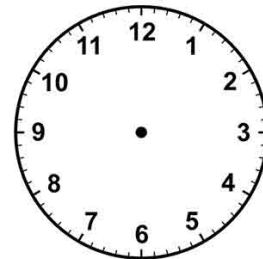
4 o'clock



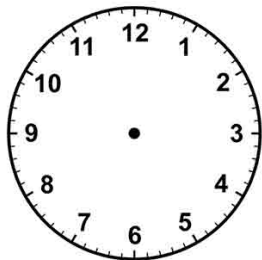
8 o'clock



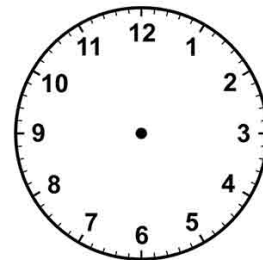
11 o'clock



2 o'clock



7 o'clock



10 o'clock