




# PICTOGRAM 1

Pictograms use pictures to represent data

Look at the pictogram about favourite fruits and answer the questions:

 means 1 child

apple	
banana	
orange	

How many children liked oranges the best?

How many children liked apples the best?

How many more children liked bananas than apples?




Which is the favourite fruit?

How many children were asked about their favourite fruits?

# PICTOGRAM 1

## Answers

 means 1 child

apple	
banana	
orange	

How many children liked oranges the best?

6

How many children liked apples the best?

4

How many more children liked bananas than apples?

4

Which is the favourite fruit?

banana

How many children were asked about their favourite fruits?

18

## PICTOGRAM 2

**Make a pictogram to show the data below  
(use a picture of a face to represent one child)**

12 children were asked about their favourite fruits

3 children said they like cherries the best

4 children said they liked pears the best

5 children said they liked melon the best


**Write 3 questions about the data shown**

.....

.....

.....

.....

.....

.....

.....

## PICTOGRAM 2

### Answers



12 children were asked about their favourite fruits

3 children said they like cherries the best

4 children said they liked pears the best

5 children said they liked melon the best

 means 1 child

cherries	
pears	
melon	