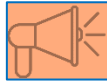


# ROMAN NUMERALS TO 10

1, 2, 3 and 5

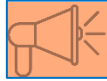


Arabic numeral	Roman numeral
1	I
2 1 + 1	I I
3 1 + 1 + 1	I I I
5	V

# ROMAN NUMERALS TO 10

## 1, 2, 3 and 5

Draw a line to join the numerals with the same value



1

V

2

III

3

I

5

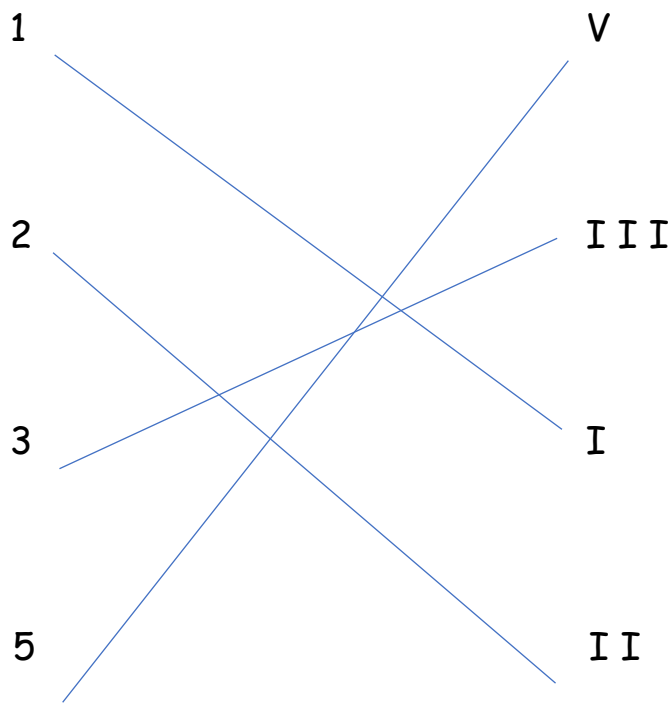
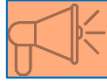
II

# ROMAN NUMERALS TO 10

## 1, 2, 3 and 5

Draw a line to join the numerals with the same value

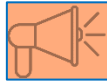
### Answers



# ROMAN NUMERALS TO 10

## 1, 2, 3 and 5

Write the Roman numeral for each Arabic numeral



1

2

3

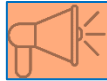
5

# ROMAN NUMERALS TO 10

1, 2, 3 and 5

Write the Roman numeral for each Arabic numeral

## Answers



1

I

2

II

3

III

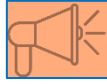
5

V

# ROMAN NUMERALS TO 10

## 1, 2, 3 and 5

Write the value of each Roman numeral



I

II

III

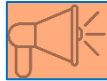
V

# ROMAN NUMERALS TO 10

1, 2, 3 and 5

Write the value of each Roman numeral

## Answers



I

1

II

2

III

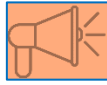
3

V

5

# ROMAN NUMERALS TO 10

6,7,8 and 10

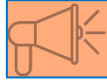


Arabic numeral	Roman numeral
6 5 + 1	V I
7 5 + 1 + 1	V I I
8 5 + 1 + 1 + 1	V I I I
10 10	X

# ROMAN NUMERALS TO 10

## 6,7,8 and 10

Draw a line to join the numerals with the same value



6

V I I I

7

V I

8

X

10

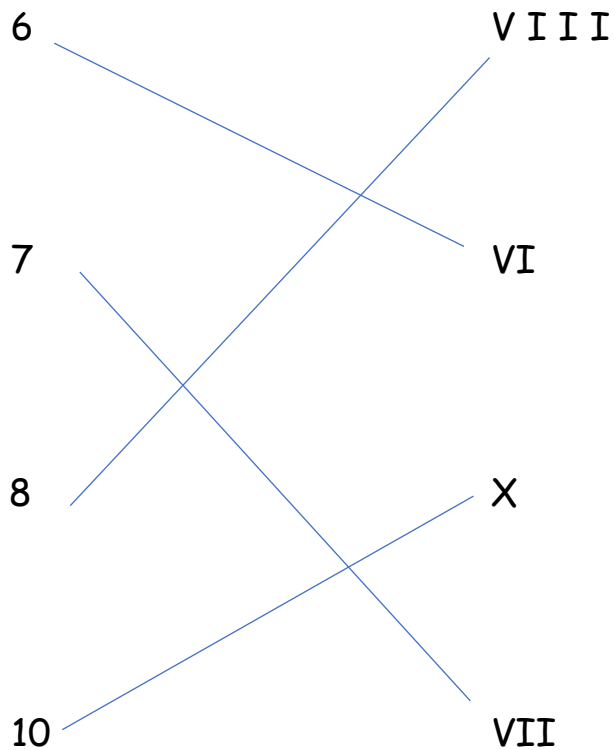
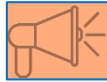
V I I

# ROMAN NUMERALS TO 10

## 6,7,8 and 10

Draw a line to join the numerals with the same value

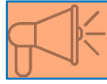
Answers



# ROMAN NUMERALS TO 10

## 6,7,8 and 10

Write the Roman numeral for each Arabic numeral



6

7

8

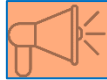
10

# ROMAN NUMERALS TO 10

## 6,7,8 and 10

Write the Roman numeral for each Arabic numeral

### Answers



6

VI

7

VII

8

VIII

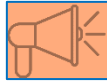
10

X

# ROMAN NUMERALS TO 10

## 6,7,8 and 10

Write the value of each Roman numeral



VII

VIII

X

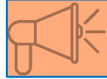
VI

# ROMAN NUMERALS TO 10

## 6,7,8 and 10

Write the value of each Roman numeral

Answers



VII

7

VIII

8

X

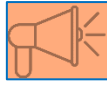
10

VI

6

# ROMAN NUMERALS TO 10

## 4 and 9

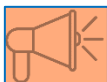


Arabic numeral	Roman numeral
4 5 - 1	I V
9 10 - 1	I X

# ROMAN NUMERALS TO 10

## 4 and 9

Draw a line to join the numerals with the same value



4

IX

9

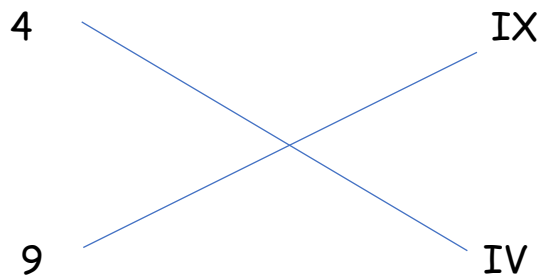
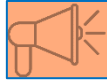
IV

# ROMAN NUMERALS TO 10

## 4 and 9

Draw a line to join the numerals with the same value

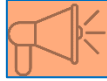
**Answers**



# ROMAN NUMERALS TO 10

## 4 and 9

Write the Roman numeral for each number



4

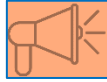
9

# ROMAN NUMERALS TO 10

## 4 and 9

Write the Roman numeral for each Arabic numeral

Answers



4

IV

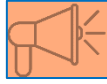
9

IX

# ROMAN NUMERALS TO 10

## 4 and 9

Write the value of each Roman numeral



IX

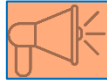
IV

# ROMAN NUMERALS TO 10

## 4 and 9

Write the value of each Roman numeral

Answers



IV

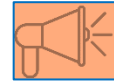
4

IX

9

ROMAN NUMERALS TO 10  
1-10

Write the Roman numeral for each Arabic numeral



1

2

3

5

6

7

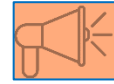
8

10

9

4

ROMAN NUMERALS TO 10  
1-10



Write the Roman numeral for each Arabic numeral

Answers

1

I

2

II

3

III

5

V

6

VI

7

VII

8

VIII

10

X

9

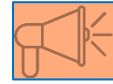
IX

4

IV

ROMAN NUMERALS TO 10  
1-10

Write the value of each Roman numeral



I

II

III

V

VI

VII

VIII

X

IX

IV

ROMAN NUMERALS TO 10  
1-10

Write the value of each Roman numeral



Answers

I

1

II

2

III

3

V

5

VI

6

VII

7

VIII

8

X

10

IX

9

IV

4